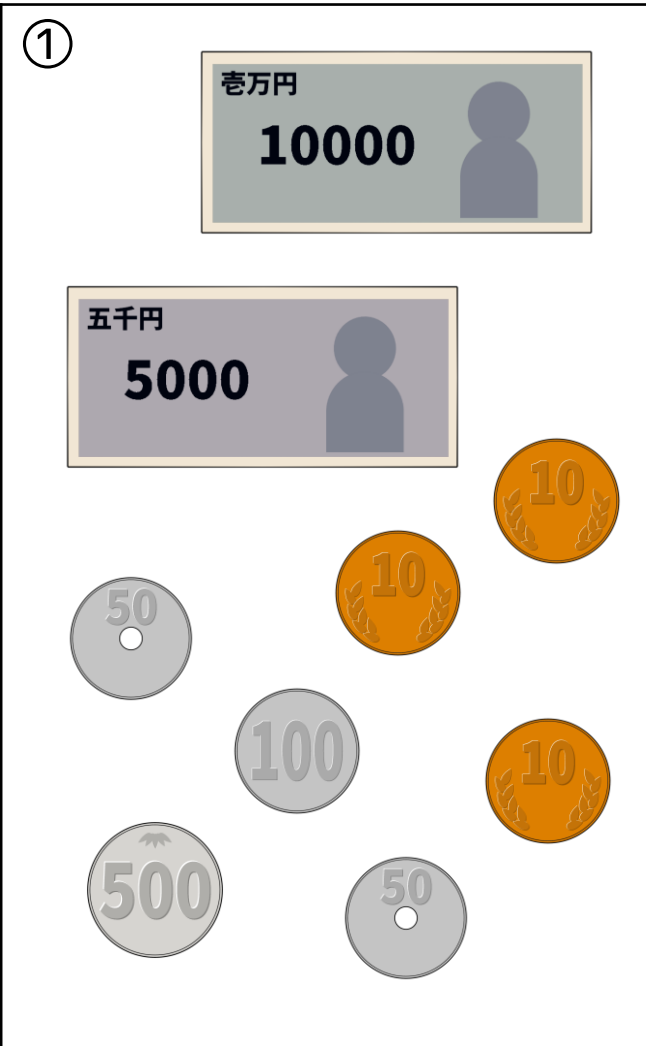


# お金の計算 ⑭

それぞれ何円になるか計算してください

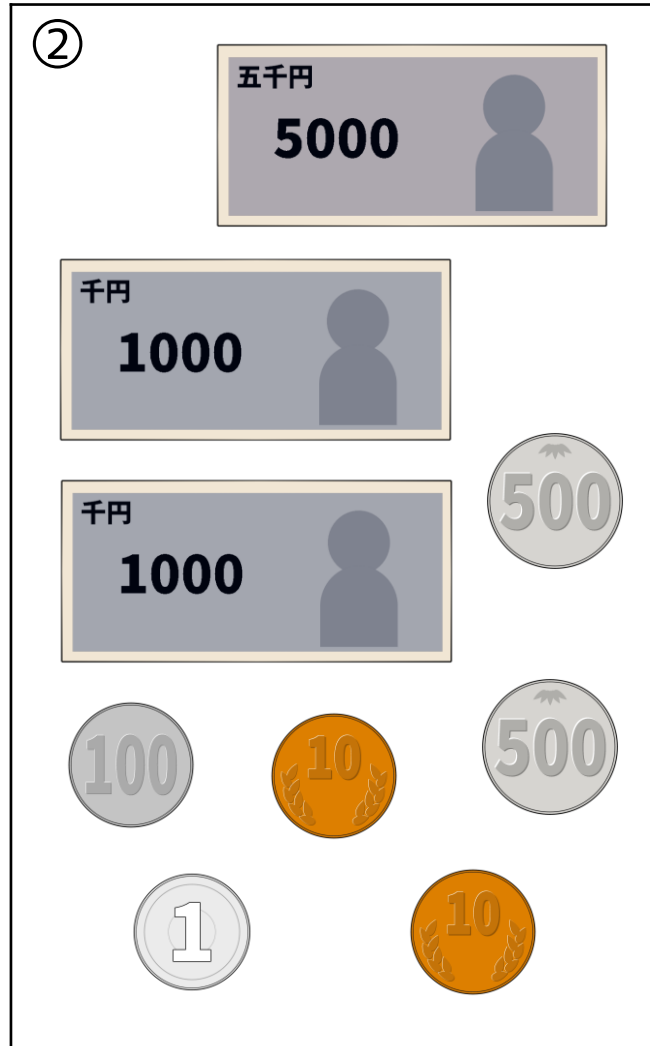
①



Panel 1 contains a 10000 yen banknote (labeled 10000 万円), a 5000 yen banknote (labeled 5000 五千元), and the following coins: one 50 yen coin, one 100 yen coin, one 500 yen coin, and three 10 yen coins.

(                      円)

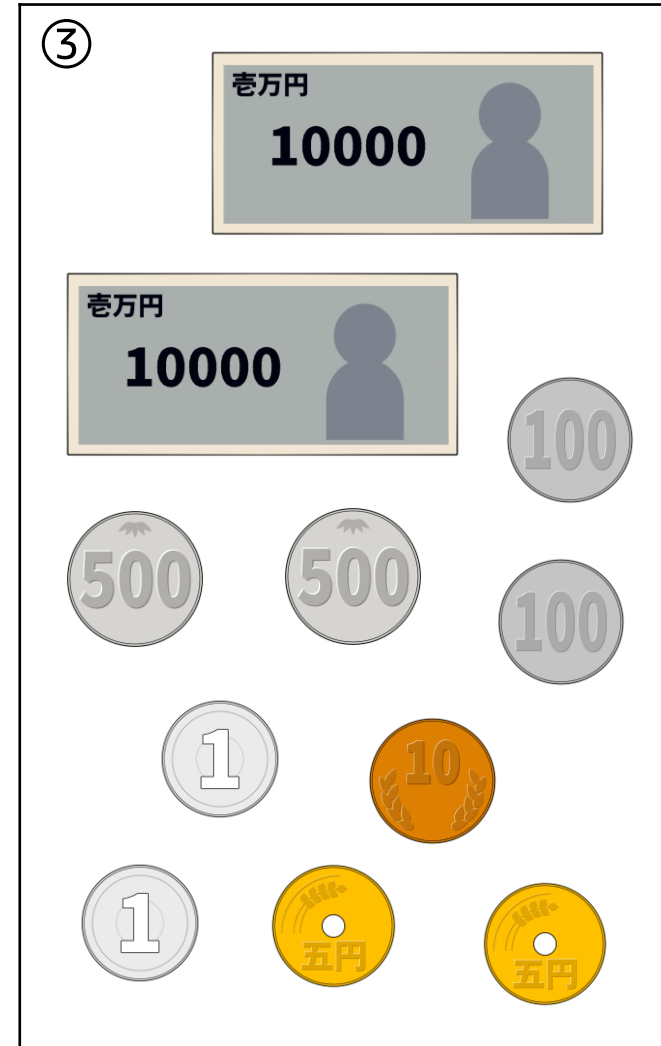
②



Panel 2 contains a 5000 yen banknote (labeled 5000 五千元), two 1000 yen banknotes (labeled 1000 千円), and the following coins: one 100 yen coin, one 1 yen coin, two 500 yen coins, and two 10 yen coins.

(                      円)

③



Panel 3 contains two 10000 yen banknotes (labeled 10000 万円), and the following coins: one 100 yen coin, two 500 yen coins, two 1 yen coins, one 10 yen coin, and two 5 yen coins.

(                      円)